



















Name: \_\_\_\_\_

Date: \_\_\_\_\_

Time: \_\_\_\_ : \_\_\_\_ - \_\_\_\_ : \_\_\_\_

Subtract to find each difference.

1	2	3	4	5	6	7	8	9	10
---	---	---	---	---	---	---	---	---	----

$3 - 1 = \square$  	$8 - 4 = \square$  
$7 - 5 = \square$  	$9 - 6 = \square$  
$6 - 4 = \square$  	$7 - 3 = \square$  
$8 - 2 = \square$  	$9 - 1 = \square$  
$8 - 7 = \square$  	$5 - 4 = \square$ 